



Learning Objective - I can subtract from 10


Use the large bricks to help you subtract/take away.




$$- 4 =$$




$$- 6 =$$



$$- 3 =$$




$$- 8 =$$



$$- 7 =$$



$$- 5 =$$



$$- 1 =$$