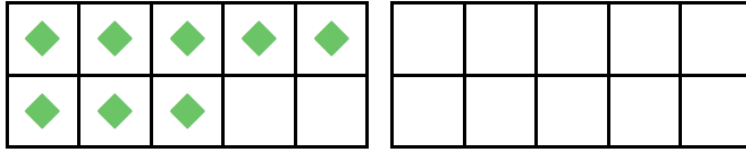
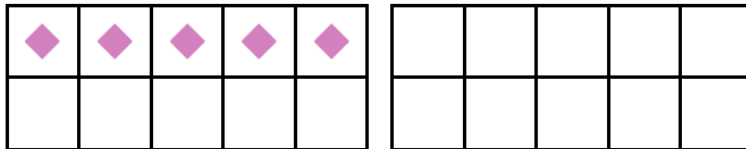


LO - I can add two numbers by making ten.

Complete the ten frames to solve the calculations below.

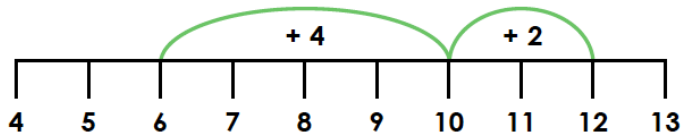


$$8 + 5 = \square$$

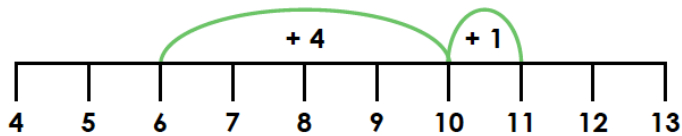


$$5 + 7 = \square$$

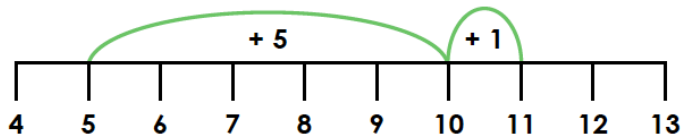
Match each number line with the correct calculation.



$$5 + 6 = 11$$



$$6 + 6 = 12$$



$$6 + 5 = 11$$